



Oxford Cambridge and RSA

Wednesday 20 October 2021 – Afternoon

A Level Further Mathematics B (MEI)

Y433/01 Modelling with Algorithms

Printed Answer Booklet

Time allowed: 1 hour 15 minutes



You must have:

- Question Paper Y433/01 (inside this document)
- the Formulae Booklet for Further Mathematics B (MEI)
- a scientific or graphical calculator



Please write clearly in black ink. **Do not write in the barcodes.**

Centre number

--	--	--	--	--

Candidate number

--	--	--	--

First name(s)

Last name

INSTRUCTIONS

- Use black ink. You can use an HB pencil, but only for graphs and diagrams.
- Write your answer to each question in the space provided in the **Printed Answer Booklet**. If you need extra space use the lined pages at the end of the Printed Answer Booklet. The question numbers must be clearly shown.
- Answer **all** the questions.
- Where appropriate, your answer should be supported with working. Marks might be given for using a correct method, even if your answer is wrong.
- Give your final answers to a degree of accuracy that is appropriate to the context.

INFORMATION

- This document has **12** pages.

ADVICE

- Read each question carefully before you start your answer.

1(a)	

1(b)	

The answer space for Q2(a) and Q2(b) is on page 3

2(c)	

2(d)	

2(a)(b)	
----------------	--

2(e)	

3(a)(i)

3(a)(ii)

3(b)

Key:

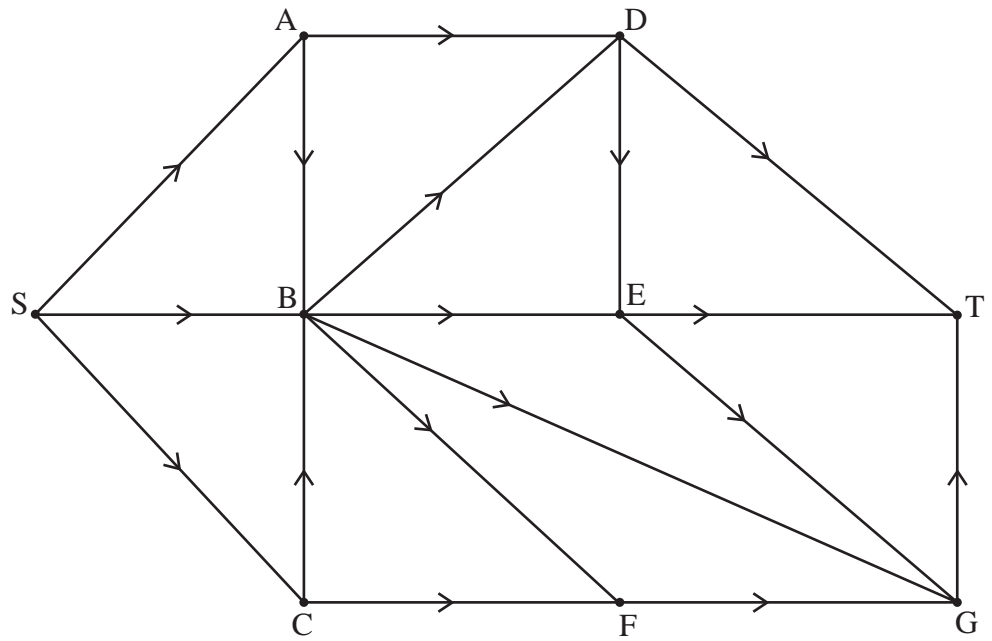
Order of labelling		←	Label
Working values (do not cross out)		→	

Shortest path from A to F:

3(c)	STEP 1:		
	Possible pairings of odd nodes	Corresponding shortest path	Length of shortest path
3(d)	STEP 2:		
	STEP 3:		

4(a)(i)	Cut $\alpha =$
4(a)(ii)	Cut $\beta =$
4(b)	The maximum possible flow is
4(c)	
4(d)	
	Subject to
	$SA - AB - AD = 0$
	$SC - CB - CF = 0$
	$AD + BD - DE - DT = 0$
	$BF + CF - FG = 0$
	$BG + EG + FG - GT = 0$
$SA \leq 62, SB \leq 71, SC \leq 47, AB \leq 43, AD \leq 22, BD \leq 39, BE \leq 32, BF \leq 43,$ $BG \leq 47, CB \leq 25, CF \leq 39, DE \leq 33, EG \leq 43, FG \leq 42$	

4(e)



4(f)

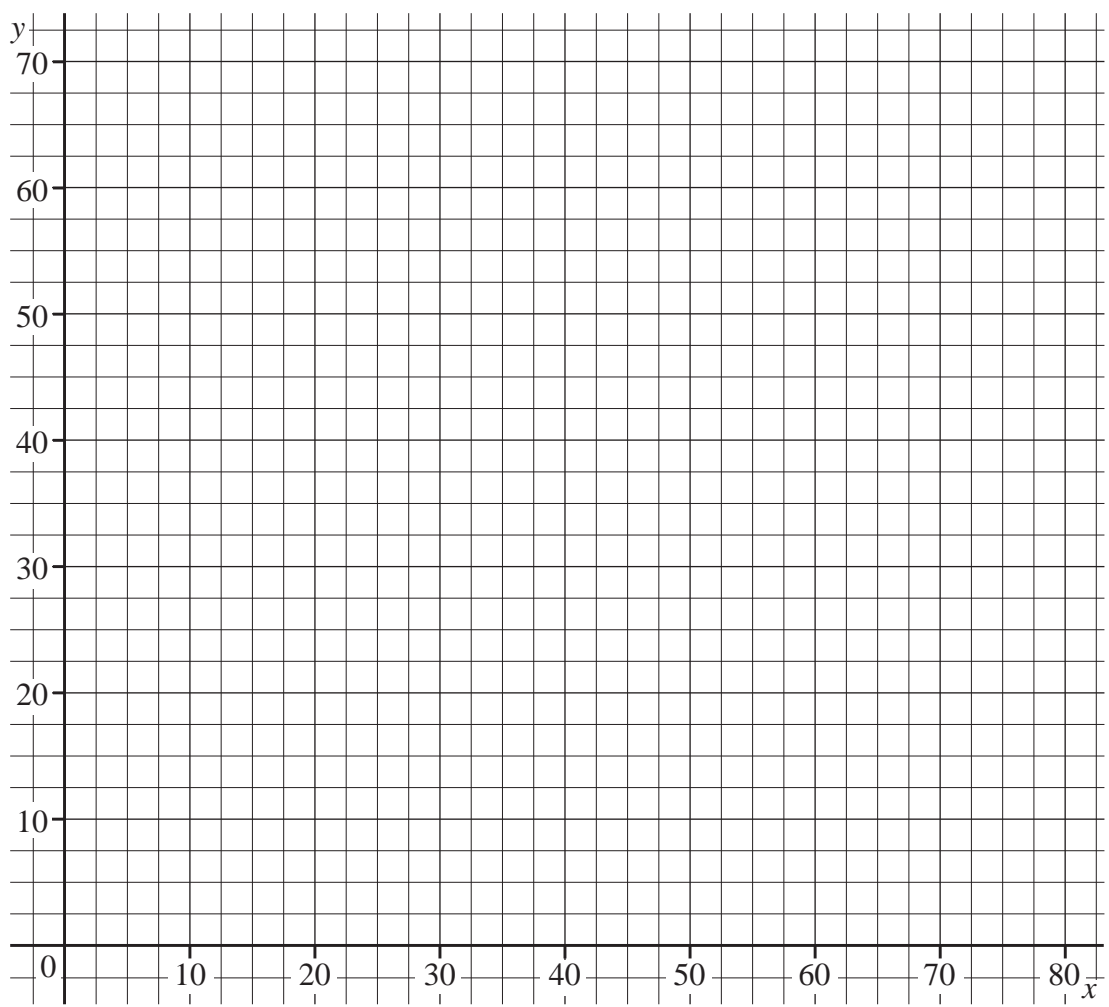
4(g)

5(a)

Q	P	x	y	z	s_1	s_2	s_3	s_4	s_5	a_1	RHS

There is a spare copy of this tableau on page 11

5(b)



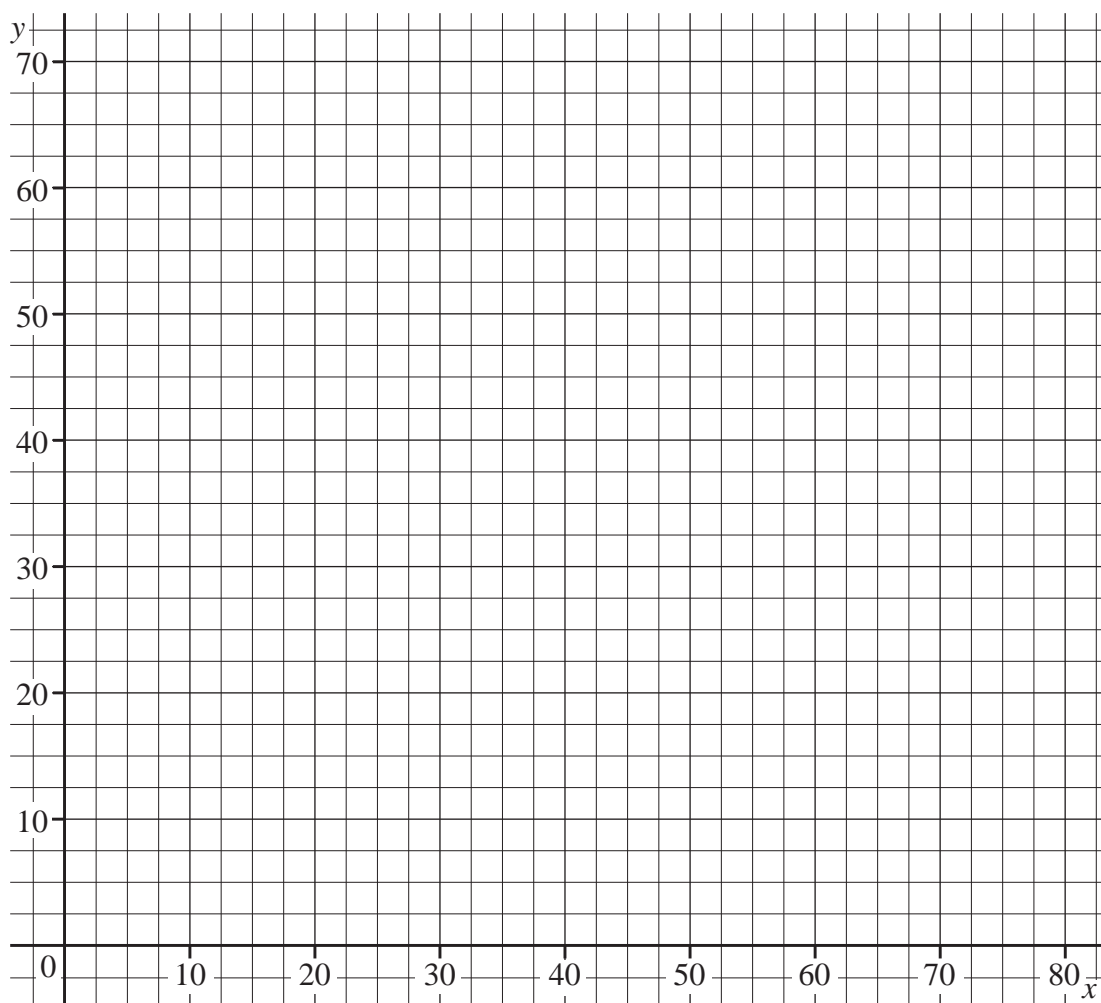
There is a spare copy of this graph on page 11

5(c)	
5(d)(i)	
5(d)(ii)	
5(e)	

5(a) Spare copy of tableau for Q5(a)

Q	P	x	y	z	s_1	s_2	s_3	s_4	s_5	a_1	RHS

5(b) Spare copy of graph for Q5(b)



ADDITIONAL ANSWER SPACE

If additional space is required, you should use the following lined page(s). The question number(s) must be clearly shown in the margin(s).

OCR

Oxford Cambridge and RSA

Copyright Information

OCR is committed to seeking permission to reproduce all third-party content that it uses in its assessment materials. OCR has attempted to identify and contact all copyright holders whose work is used in this paper. To avoid the issue of disclosure of answer-related information to candidates, all copyright acknowledgements are reproduced in the OCR Copyright Acknowledgements Booklet. This is produced for each series of examinations and is freely available to download from our public website (www.ocr.org.uk) after the live examination series.

If OCR has unwittingly failed to correctly acknowledge or clear any third-party content in this assessment material, OCR will be happy to correct its mistake at the earliest possible opportunity.

For queries or further information please contact The OCR Copyright Team, The Triangle Building, Shaftesbury Road, Cambridge CB2 8EA.

OCR is part of the Cambridge Assessment Group; Cambridge Assessment is the brand name of University of Cambridge Local Examinations Syndicate (UCLES), which is itself a department of the University of Cambridge.